
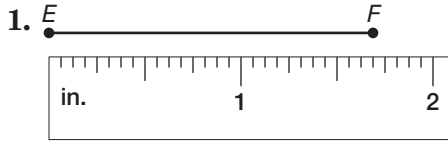


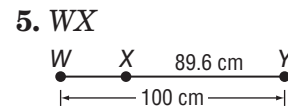
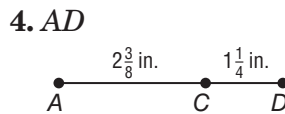
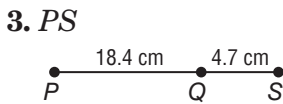
1-2 Practice

Linear Measure

Find the length of each line segment or object.



Find the measurement of each segment. Assume that each figure is not drawn to scale.

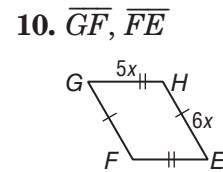
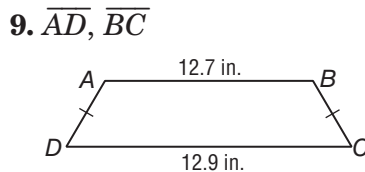
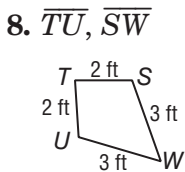


ALGEBRA Find the value of x and KL if K is between J and L .

6. $JK = 6x$, $KL = 3x$, and $JL = 27$

7. $JK = 2x$, $KL = x + 2$, and $JL = 5x - 10$

Determine whether each pair of segments is congruent.



11. **CARPENTRY** Jorge used the figure at the right to make a pattern for a mosaic he plans to inlay on a tabletop. Name all of the congruent segments in the figure.

